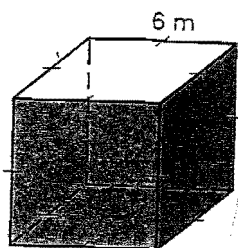


Chapter 12 Practice C Review Name _____

Find the Surface Area and Volume. Round all answers to 2 decimal places, if needed.

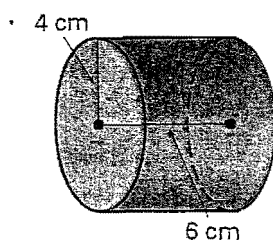
1.



1. $V =$ _____

$S =$ _____

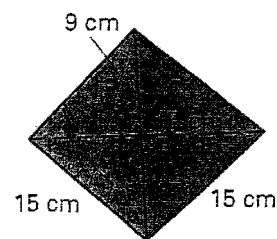
2.



2. $V =$ _____

$S =$ _____

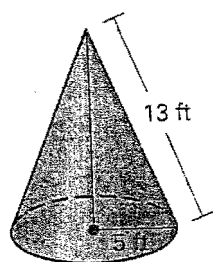
3.



3. $V =$ _____

$S =$ _____

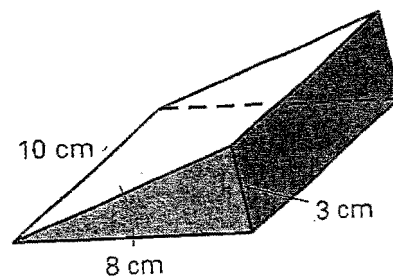
4.



4. $V =$ _____

$S =$ _____

5.



5. $V =$ _____

$S =$ _____