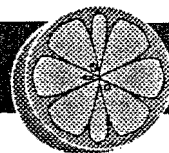
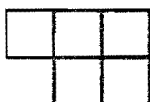


Segments and Angles

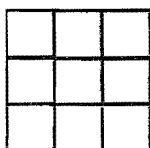


Fun and Games

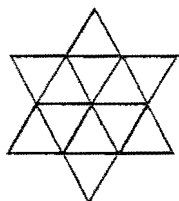
1. Remove three pieces to leave three squares.




2. Remove six pieces to leave three squares.




3. How many triangles are in the figure?



4. How many triangles are in the figure?



5. How many squares are in the figure?



6. How many squares are in the figure?

